

Non-Verbal Reasoning



INSTRUCTIONS



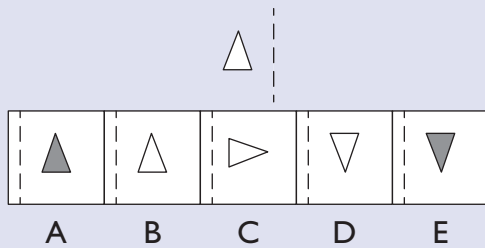
YOU HAVE 7 MINUTES TO COMPLETE THE FOLLOWING SECTION.

YOU HAVE 13 QUESTIONS TO COMPLETE WITHIN THE TIME GIVEN.

EXAMPLES

REFLECTION Example 1

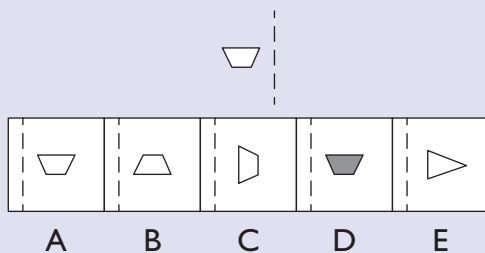
Select how the following shape or pattern would appear when reflected in the dashed line:



The correct answer is B. This has already been marked in Example 1 in the Non-Verbal Reasoning section of your answer sheet.

REFLECTION Practice Question 1

Select how the following shape or pattern would appear when reflected in the dashed line:



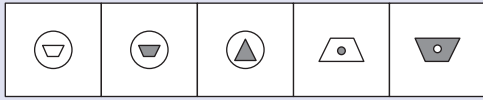
The correct answer is A. Please mark this in Practice Question 1 in the Non-Verbal Reasoning section of your answer sheet.

CONTINUE WORKING



CONNECTION Example 2

Look at the two shapes on the left immediately below. Find the connection between them.



A

B

C

D

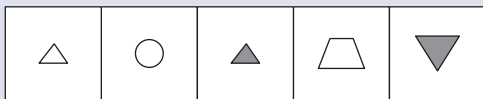
E

Select the shape that is related to the third shape above by applying the same connection.

The correct answer is B. This has already been marked in Example 2 in the Non-Verbal Reasoning section of your answer sheet.

CONNECTION Practice Question 2

Look at the two shapes on the left immediately below. Find the connection between them.



A

B

C

D

E

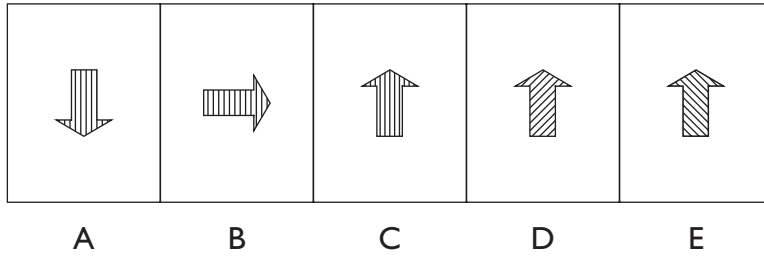
Select the shape that is related to the third shape above by applying the same connection.

The correct answer is E. Please mark this in Practice Question 2 in the Non-Verbal Reasoning section of your answer sheet.

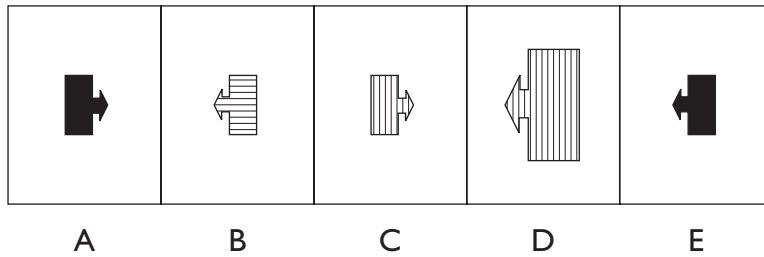
STOP AND WAIT FOR FURTHER INSTRUCTIONS



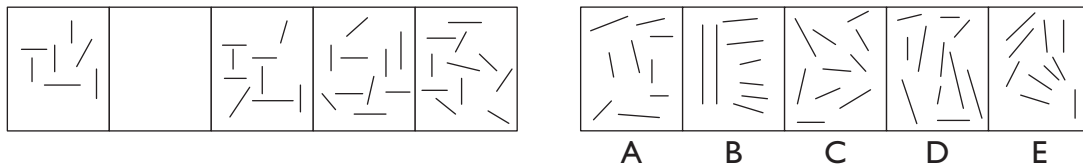
- 1 Look at the two shapes on the left immediately below.
Find the connection between them and apply it to the third shape.



- 2 Look at the two shapes on the left immediately below.
Find the connection between them and apply it to the third shape.



- 3 Select the correct picture from the row on the right in order to finish the incomplete sequence on the left.



- 4 Select the correct picture from the row on the right in order to finish the incomplete sequence on the left.

