

Number and place value



Answer the questions and then find the answers in the wordsearch.

0

8

?

24

32

r	a	f	k	r	t	v	f	a	r	h	s
e	y	v	o	r	g	p	o	u	e	s	d
a	r	v	s	r	c	q	u	l	k	b	w
n	f	f	s	l	t	k	r	r	r	g	l
s	t	h	i	r	t	y	t	w	o	p	t
f	e	u	x	f	u	x	h	r	w	i	x
e	i	v	t	o	t	r	o	b	m	r	m
i	z	v	e	m	b	y	u	s	w	l	r
g	t	w	e	n	t	y	s	i	x	v	z
h	w	s	n	p	l	i	a	z	k	r	c
t	h	r	e	e	h	u	n	d	r	e	d
y	m	q	e	n	s	w	d	s	t	u	z

24

28

?

36

40



More number and place value

Answer the questions and then find the answers in the wordsearch.



s	w	t	h	i	r	t	y	s	i	x	t
u	u	e	u	a	a	s	f	t	p	s	r
t	w	o	t	h	o	u	s	a	n	d	j
s	g	f	n	z	l	j	t	p	l	f	a
d	e	t	c	e	i	g	h	t	y	m	u
f	i	v	e	t	h	o	u	s	a	n	d
i	j	d	e	t	m	u	q	p	x	o	g
f	p	s	p	n	a	b	n	t	l	t	v
t	h	r	e	e	h	u	n	d	r	e	d
y	c	r	i	y	u	a	a	l	r	n	f
l	y	j	l	r	a	r	k	w	w	e	h
l	r	f	o	r	t	y	t	w	o	q	d

Find the missing number.

- 1 24, 28, _____, 36, 40
- 2 0, 8, _____, 24, 32
- 3 100, 200, _____, 400, 500
- 4 48, 56, 64, 72, _____
- 5 0, _____, 100, 150, 200

What is...

- 6 10 less than 15? _____
- 7 10 more than 30? _____
- 8 10 more than 16? _____
- 9 100 less than 107? _____
- 10 1000 more than 3000? _____

Find the missing number.

- 1 _____, 14, 21, 28, 35
- 2 36, _____, 48, 54, 60
- 3 18, 27, _____, 45, 54
- 4 25, _____, 75, 100, 125
- 5 _____, 6000, 7000, 8000, 9000

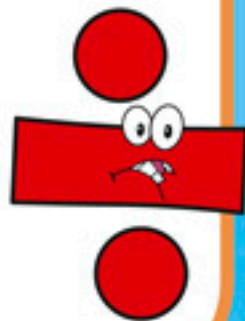



Round the numbers.

- 6 13 → _____ to the nearest 10
- 7 78 → _____ to the nearest 10
- 8 85 → _____ to the nearest 100
- 9 340 → _____ to the nearest 100
- 10 1500 → _____ to the nearest 1000

Division facts

Complete the divisions and then find the answers in the wordsearch.

a	o	v	u	t	s	f	g	y	z	x	a
u	t	l	a	w	c	e	l	e	v	e	n
r	h	v	i	e	i	p	w	t	h	i	i
s	r	f	r	l	g	c	r	t	s	g	n
i	e	i	t	v	t	t	p	a	q	h	e
x	e	v	b	e	t	n	o	z	h	t	u
e	l	e	e	z	f	s	k	j	s	c	e
p	o	e	l	n	k	i	s	t	e	n	i
w	l	r	e	n	f	l	s	b	a	f	a
q	e	r	w	a	o	a	d	u	e	m	v
m	b	a	m	a	u	u	v	b	u	p	p
t	r	e	a	i	r	y	r	g	t	m	t



1 $12 \div 4 = \underline{\quad}$

2 $32 \div 8 = \underline{\quad}$

3 $96 \div 8 = \underline{\quad}$

4 $25 \div 5 = \underline{\quad}$

5 $36 \div 4 = \underline{\quad}$

6 $33 \div 3 = \underline{\quad}$

7 $32 \div 4 = \underline{\quad}$

8 $12 \div 2 = \underline{\quad}$

9 $35 \div 5 = \underline{\quad}$

10 $100 \div 10 = \underline{\quad}$

More division facts

Complete the divisions and then find the answers in the wordsearch.

n	t	p	j	o	r	f	o	u	r	q	o
u	k	q	s	o	g	o	i	t	c	l	s
h	m	l	n	e	m	v	f	j	s	m	d
i	c	m	j	o	t	s	z	o	t	p	s
p	n	r	v	s	r	u	n	r	k	p	j
s	i	x	t	i	l	n	p	s	e	i	c
z	n	z	w	s	e	w	u	b	r	n	o
s	e	l	e	v	e	n	u	p	s	v	k
t	e	n	l	f	i	v	e	m	m	u	v
g	j	v	v	a	g	s	a	c	h	e	s
t	h	r	e	e	h	r	z	v	b	w	f
j	r	d	a	n	t	z	s	s	u	i	y



1 $144 \div 12 = \underline{\quad}$

2 $121 \div 11 = \underline{\quad}$

3 $63 \div 9 = \underline{\quad}$

4 $63 \div 7 = \underline{\quad}$

5 $36 \div 6 = \underline{\quad}$

6 $110 \div 11 = \underline{\quad}$

7 $56 \div 7 = \underline{\quad}$

8 $36 \div 12 = \underline{\quad}$

9 $55 \div 11 = \underline{\quad}$

10 $28 \div 7 = \underline{\quad}$

Decimals

Answer the questions and then find the answers in the wordsearch.

3.3

10.8

13.4

16.1

20.2

49.7

t	j	e	i	g	h	t	y	t	w	o	u
z	h	s	a	f	u	f	e	h	t	w	j
p	s	i	u	i	n	i	u	r	r	r	i
q	q	x	r	f	d	f	n	e	m	u	z
k	m	t	i	t	r	t	w	e	n	t	y
j	t	e	e	y	e	e	l	e	v	e	n
i	h	e	k	n	d	e	s	s	a	j	z
y	a	n	p	o	t	n	n	o	e	l	b
p	u	t	u	b	h	h	g	c	k	e	o
r	l	t	r	d	s	o	s	i	z	p	r
r	q	s	u	e	e	h	m	r	c	e	k
s	g	r	r	m	o	u	w	s	i	p	r

Round each decimal to the nearest whole number.

- 1 10.8 → _____
- 2 3.3 → _____
- 3 20.2 → _____
- 4 13.4 → _____
- 5 49.7 → _____

- 6 14.5 → _____
- 7 81.9 → _____
- 8 16.1 → _____

Fill in the missing words.

- 9 0.2 is equal to two _____.
- 10 0.09 is equal to nine _____.

Money

Work out the amount of change in pence and then find the answers in the wordsearch.



e	i	g	h	t	e	e	n	e	u	i	t
c	a	t	m	w	p	w	t	r	f	s	w
i	s	e	v	e	n	t	y	f	i	v	e
g	f	k	p	n	s	l	x	o	f	x	n
f	o	u	r	t	e	e	n	r	t	u	t
z	n	s	i	y	w	m	u	t	y	b	y
a	e	o	b	s	a	o	t	y	h	r	f
i	l	t	h	i	r	t	y	e	i	w	i
l	o	l	n	x	n	g	o	i	p	u	v
q	k	r	p	b	h	x	w	g	u	a	e
a	a	f	k	i	n	i	e	h	r	l	m
k	p	h	g	g	l	r	a	t	w	f	f

- 1 £1 - 75 p = _____ p
- 2 £2 - £1.50 = _____ p
- 3 £10 - £9.99 = _____ p
- 4 £5 - £4.25 = _____ p
- 5 50 p - 32 p = _____ p

- 6 20 p - 6 p = _____ p
- 7 £1 - 70 p = _____ p
- 8 £2 - £1.98 = _____ p
- 9 £5.50 - £5.24 = _____ p
- 10 £10 - £9.52 = _____ p