

Bridging GCSE and A-level Maths

Exam paper: Mark scheme

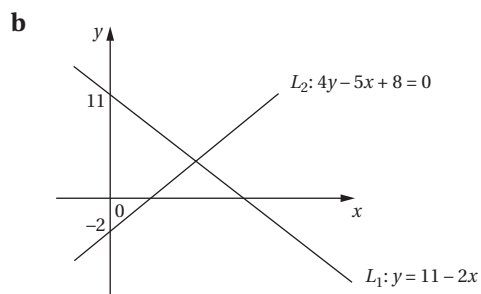
1 a $27^n = \frac{1}{9} \Rightarrow (3^3)^n = 3^{-2}$
 $3^{3n} = 3^{-2}$ M1
 $3n = -2$
 $n = -\frac{2}{3}$ A1 [2]

b $\frac{5-2\sqrt{3}}{4+\sqrt{3}} = \frac{(5-2\sqrt{3})(4-\sqrt{3})}{(4+\sqrt{3})(4-\sqrt{3})}$ M1
 $= \frac{20-5\sqrt{3}-8\sqrt{3}+6}{16-3}$
 $= \frac{26-13\sqrt{3}}{13}$ A1
 $= 2-\sqrt{3}$
 $a = 2, b = -1$ A1 [3]

2 Discriminant $b^2 - 4ac = 0$ M1
 $(-12)^2 - 4(4)c = 0$
 $144 - 16c = 0$ A1
leading to $c = 9$ A1 [3]

3 a The aeroplane is descending at a rate of 0.12 km per minute. B1 [1]
b i Solve $2.7 - 0.12t = 0$ M1
leading to $t = 22.5$
Coordinates are $(22.5, 0)$ A1 [2]
ii It takes 22.5 minutes from the start of its descent for the aeroplane to land. B1 [1]

4 a Solve $4(11 - 2x) - 5x + 8 = 0$ M1
leading to $52 - 13x = 0$
 $x = 4$
 $y = 11 - 2(4)$ M1
 $= 3$
Intersection point has coordinates $(4, 3)$ A1 [3]
[Alt: Solve $11 - 2x = \frac{1}{4}(5x - 8)$]



Correct y-intercepts and direction of slopes

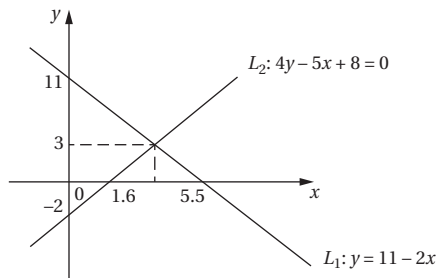
B1

Intersection point in 1st quadrant

B1

[2]

c



x-intercepts: $L_1 : x = \frac{11}{2} = 5.5$

$L_2 : x = \frac{8}{5} = 1.6$

M1

Area of triangle = $\frac{1}{2} \times (5.5 - 1.6) \times 3$ M1

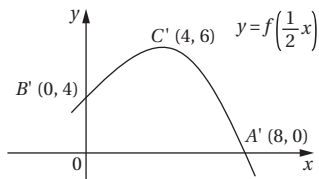
= 5.85 square units. A1

[3]

5 $A(4, 0) \rightarrow A'(8, 0)$

$B(0, 4) \rightarrow B'(0, 4)$

$C(2, 6) \rightarrow C'(4, 6)$



Correct shape

B1

Correct coordinates for B'

B1

Correct coordinates for A' and C'

B1

[3]

6 a $AC = 8$

Rearranged cosine rule: $\cos \theta = \frac{3^2 + 8^2 - 7^2}{2(3)(8)}$ M1

= $\frac{1}{2}$

$\theta = \cos^{-1}\left(\frac{1}{2}\right)$ M1

= 60° A1

[3]

b Area of triangle = $\frac{1}{2}(3)(8)\sin 60^\circ$

= 10.392... M1

Angle CAD = $180^\circ - 60^\circ$ A1

= 120°

Sector area = $\left(\frac{120^\circ}{360^\circ}\right) \times \pi \times (8)^2$ M1

= 67.020...

$$\begin{aligned} \text{Area of shape} &= 10.392\dots + 67.020\dots \\ &= 77.412\dots \\ &= 77.4 \text{ cm}^2 \text{ (1 decimal place)} \end{aligned} \quad \text{A1} \quad \text{[4]}$$

7 a $\overline{AB} = \overline{OB} - \overline{OA}$
 $= (0\mathbf{i} + 6\mathbf{j}) - (4\mathbf{i} + \mathbf{j})$
 $= -4\mathbf{i} + 5\mathbf{j}$ B1 [1]

b $\overline{BC} = \overline{OC} - \overline{OB}$
 $= (p\mathbf{i} + 10\mathbf{j}) - (0\mathbf{i} + 6\mathbf{j})$
 $= p\mathbf{i} + 4\mathbf{j}$
 $|\overline{BC}| = \sqrt{p^2 + 16}$ M1, A1 [2]

c $ABCD$ a square so $|\overline{BC}| = |\overline{AB}|$
 $\sqrt{p^2 + 16} = \sqrt{(-4)^2 + 5^2}$ M1
 leading to $p^2 + 16 = 41$
 $p^2 = 25$ A1
 $p = 5$ (reject $p = -5$ as $p > 4$) A1 [3]

d $\overline{OD} = \overline{OA} + \overline{AD}$ M1
 $= \overline{OA} + \overline{BC}$ M1
 $= (4\mathbf{i} + \mathbf{j}) + (5\mathbf{i} + 4\mathbf{j})$
 $= 9\mathbf{i} + 5\mathbf{j}$ A1 [3]

8 a $y = x^2 - 8x + 19$
 $\frac{dy}{dx} = 2x - 8$ M1
 $x = 5, \frac{dy}{dx} = 2(5) - 8$ $x = 5, y = (5)^2 - 8(5) + 19 = 4$ A1, A1
 $= 2$
 Equation of T : $y - 4 = 2(x - 5)$
 leading to $y = 2x - 6$ A1 [4]

b L is parallel to T so $\text{grad}_L = 2$ M1
 L passes through $A(2, 7)$
 Equation of L : $y - 7 = 2(x - 2)$
 leading to $y = 2x + 3$ A1 [2]

c x -coordinate of B
 Solve: $x^2 - 8x + 19 = 2x + 3$
 leading to: $(x - 2)(x - 8) = 0$
 $x = 8$ ($x = 2$ corresponds to point A) M1
 $\int_2^8 x^2 - 8x + 19 \, dx = \left[\frac{1}{3}x^3 - 4x^2 + 19x \right]_2^8$
 $= \left(\frac{200}{3} \right) - \left(\frac{74}{3} \right)$
 $= 42$ A1

$$\int_2^8 2x + 3 \, dx = [x^2 + 3x]_2^8$$

$$= (88) - (10)$$

$$= 78$$

A1

Area of bounded region = $78 - 42$

M1

$$= 36 \text{ square units.}$$

A1

[5]

Alt1. Area = $\int_2^8 (2x + 3) - (x^2 - 8x + 19) \, dx$

M1

$$= \int_2^8 -x^2 + 10x - 16 \, dx$$

A1

$$= \left[-\frac{1}{3}x^3 + 5x^2 - 16x \right]_2^8$$

M1, A1

$$= \left(\frac{64}{3} \right) - \left(-\frac{44}{3} \right)$$

$$= 36 \text{ square units.}$$

A1

[5]

Alt2. Finds y -coordinate of B

$$x = 8, y = 2(8) + 3$$

$$= 19$$

M1

Area of trapezium = $\frac{1}{2} \times (7 + 19) \times 6$

$$= 78$$

A1

Area under curve: $\int_2^8 x^2 - 8x + 19 \, dx = \left[\frac{1}{3}x^3 - 4x^2 + 19x \right]_2^8$

M1, A1

$$= \left(\frac{200}{3} \right) - \left(\frac{74}{3} \right)$$

$$= 42$$

Answer: $78 - 42 = 36$ square units.

A1

[5]